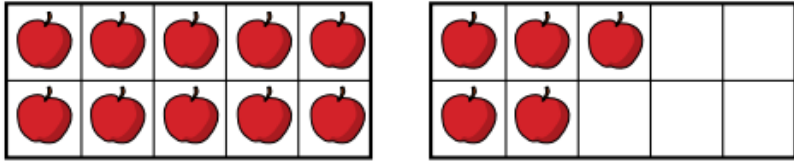


1 a) How many apples are there?



There is ten and ones.

There are apples.

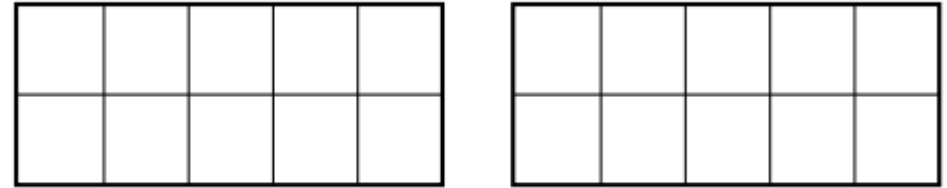
b) How many bees are there?



There is ten and ones.

There are bees.

2 Draw counters to show 1 ten and 3 ones.



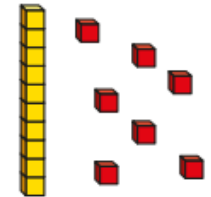
1 ten and 3 ones is equal to

3 Match the number sentences to the pictures.


1 ten and 7 ones



1 ten and 1 one



1 ten and 8 ones



4 Complete the sentences.

a) 1 ten and 6 ones =

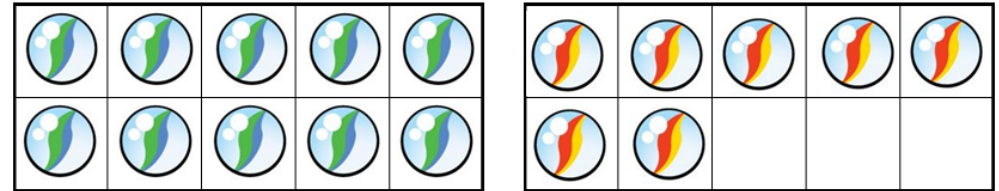
b) = 1 ten and 3 ones

c) 15 = ten and ones


d) 2 tens =

e) 1 ten and 10 ones =

Ten and Ones



There is ten and ones.



There is ten and ones.

5 Is this true or false?

The ten frames show the number 16

